

6.1.2021

Handwriting (11A 11B)

S S S S S S S S S S
P P P P P P P P P P

Spelling

have

what

when

there

some

Challenge word - because

Phonics

**Please follow link below and take part in the lesson.
If you are unsure which group you are in please ask.**

Miss Daley's phonics group (set 1) –

<https://schools.ruthmiskin.com/training/view/OEZ4wFlV/tHjeJ4ix>

Mr Gregory's phonics group (set 2) –

<https://schools.ruthmiskin.com/training/view/zjnnRdVR/c8eWZvWy>

Mrs McCurrach phonics group (set 3) –

<https://schools.ruthmiskin.com/training/view/EUYWR3GY/N9SJ2q31>

Year 1 Punctuation ladder lesson

Can you write three sentences which end with a question mark?

Remember a question can be answered.

These sentences often begin with the words **who**, **what**, **when**, **where**, **why** and **how**.

Example

What is the time?

How can you run so quickly?

Why did you throw the ball over the fence?

Year 1

.

Capital
letter

Finger
spaces


?

!

Short

Compound
-and

English - Owl Babies



This term we will be looking at the text Owl Babies and using this story for all our writing.

Please watch the link below and write three questions the Owl babies could ask Mummy owl when she arrived back to the tree.

<https://www.youtube.com/watch?v=GyiBDPJCDFY>

Example :

Where have you been Mummy?

Why did you leave us?

Did you bring us anything back?

Maths - Fluent in five

2 2 2 2 2 2 2 2 2 2

3 3 3 3 3 3 3 3 3 3

$$7 - 4 =$$

$$10 - 3 =$$

$$9 - 2 =$$

$$5 - 5 =$$

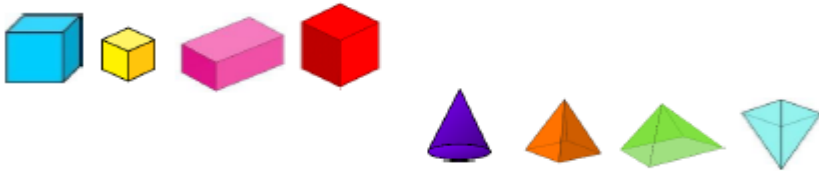
$$\underline{\quad} - 2 = 8$$

Maths - 3D Shapes - Fluency questions

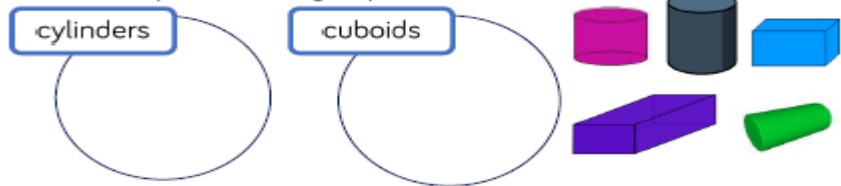
Watch this link and then answer the questions below (second video) sort 3-D shapes.

<https://whiterosemaths.com/homelearning/year-1/week-10-geometry-shape>

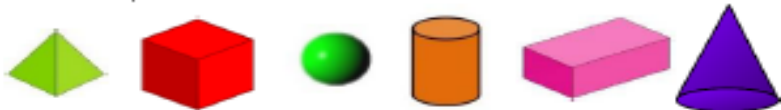
Circle the odd one out in each group.



Sort the shapes into the groups.



Which shapes will roll? Circle them.
Which shapes will stack? Tick them.



Will any of the shapes roll and stack?

Maths - Reasoning and Problem Solving

Some 3-D shapes have been sorted.

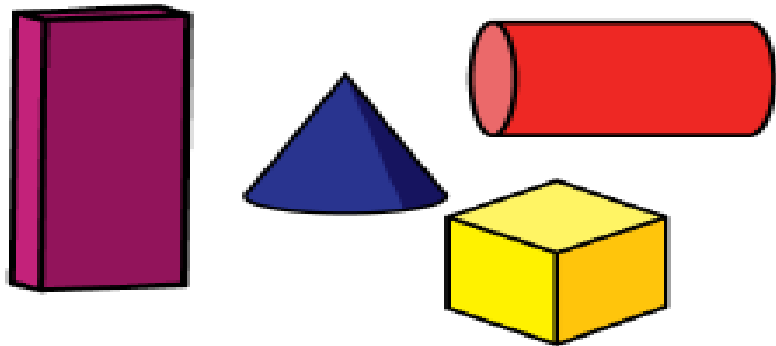


Have the shapes been sorted correctly?

Explain how you know.

How else could the shapes be sorted?

How many ways can you sort the shapes into groups?



Common exception words

Please learn these five common exception words this week. You must be able to read and spell them correctly. Remember these common exception words are very important as they will help you read fluently. They are the words we used to look at every day after lunchtime and the red words in all the phonics books we started.

the

a

do

to

today

Can you put any of these words in a sentence?