

**John Randall**

Be Ready, Be Respectful, Be Safe

Year 2  
Home learning  
4.11.20

Wednesday 4<sup>th</sup> November 2020

## Spellings

1 one

4 four

2 two

5 five

3 three

6 six

## Handwriting (IA 17 B)

ew ew . . . .

ex ex . . . .

# Punctuation ladder

Can you write 2 sentences and 2 questions about the picture?

**Year 2**

. C

?

!

, list

' contract

' possess

*Short*

Compound

-and

-but

-so

-because

-or

-if

-when

-that

Paragraphs



# Sparks in the Sky - Sorting the Senses

## Answers

### See

sparkling  
swirling  
twinkling  
flickering

dazzling  
multicoloured  
bright

### Smell/Taste

delicious  
smoky  
barbecue  
burning  
hot dog

### Hear

noisy  
crackling  
spitting  
banging  
crashing

popping  
whooshing  
cheering  
rumbling

### Feel

woolly  
cosy  
thick  
heat  
soft  
chilly

Use the sense mat to write your own senses poem about bonfire night.

Use the sentence starters to help you. Choose the best vocabulary you can think of.

## Sparks in the Sky Senses Poem

I can **see** \_\_\_\_\_

I can **hear** \_\_\_\_\_

I can **feel** \_\_\_\_\_

I can **smell** \_\_\_\_\_

I can **taste** \_\_\_\_\_

my cosy gloves

the smoky air

the yummy hot dog

the twinkling fireworks

the crashing rockets



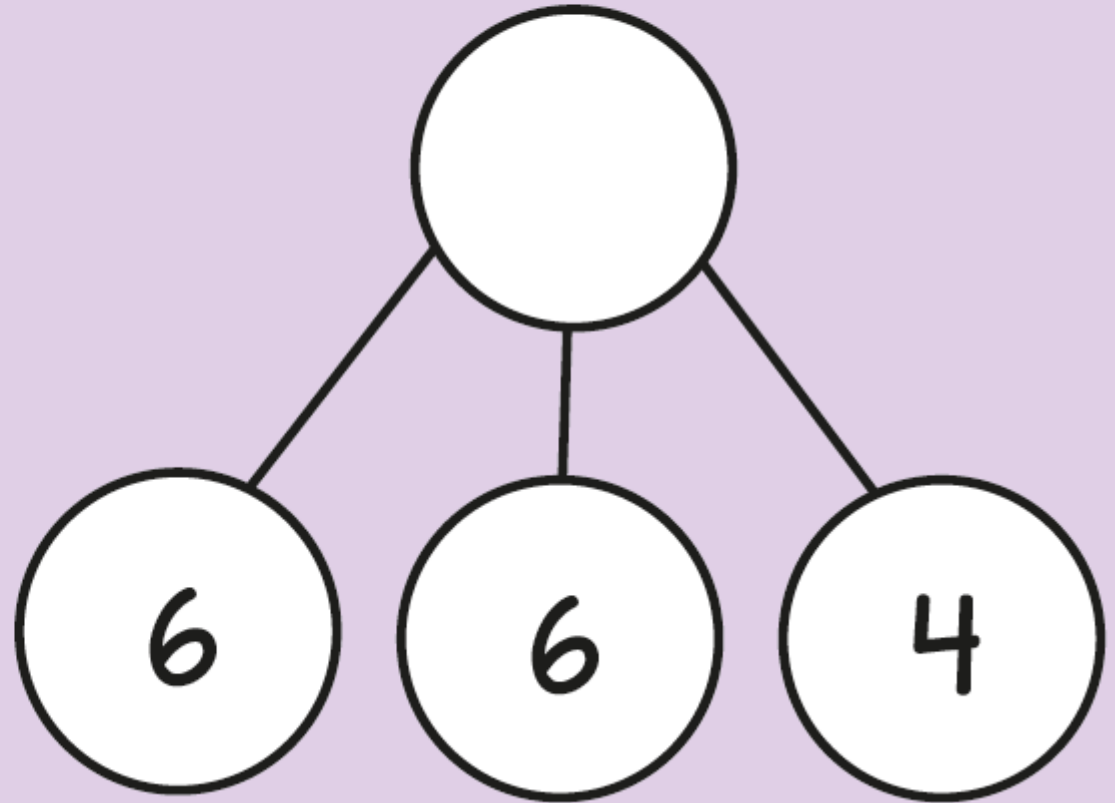
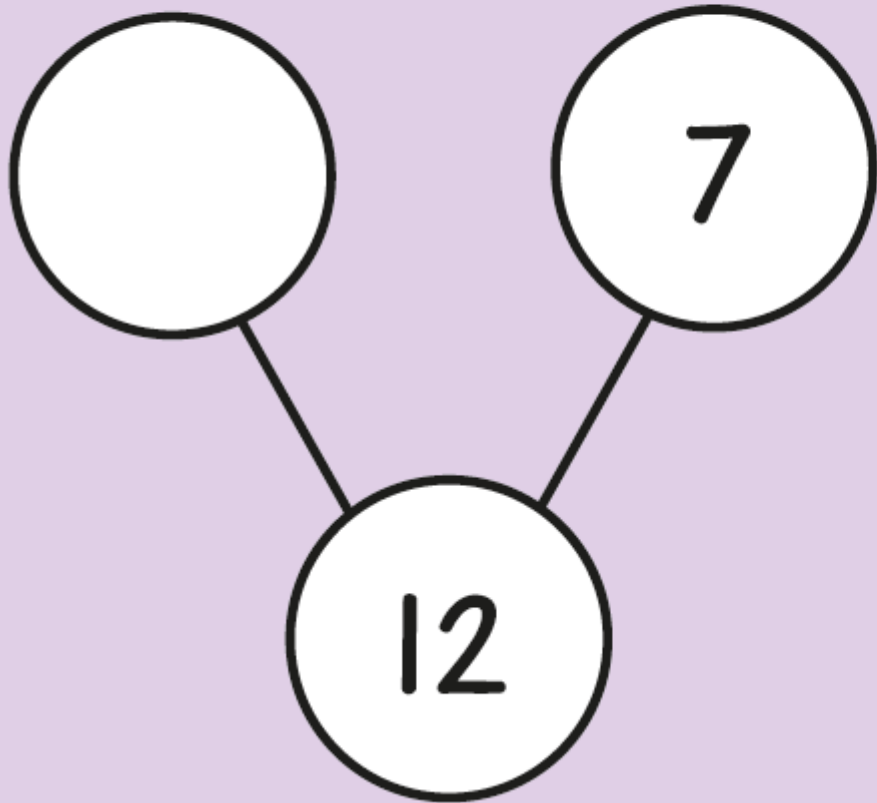


Maths





Complete the part-whole models.



- 2 Use the bar model to complete the number sentences.



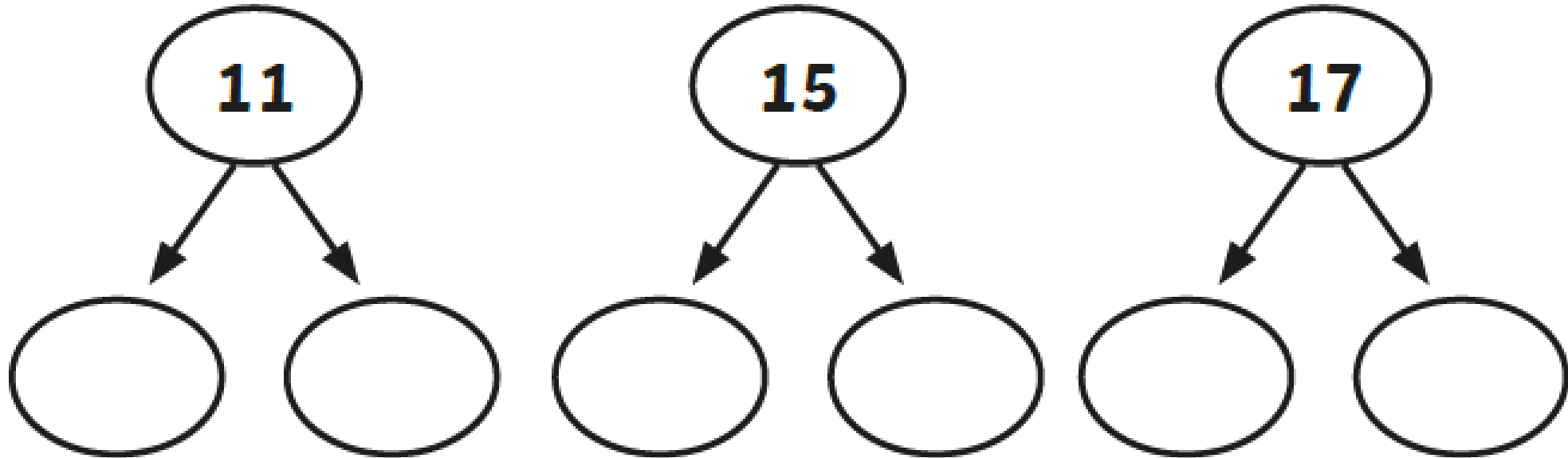
$$6 + \square = 30$$

$$\square - \square = 24$$





Partition these numbers.



Write a maths statement for this picture.



$$\square + \square = \square$$

# History



Watch this video to learn more about Guy Fawkes and the gunpowder plot.

<https://www.youtube.com/watch?v=YptNONmnXH0>